



Measure the width of each block in inches and in centimeters.

Ex)



Exin. 2 1/2

Excm. 6 - 7

1)



1in. _____

1cm. _____

2)



2in. _____

2cm. _____

3)



3in. _____

3cm. _____

4)



4in. _____

4cm. _____

5)



5in. _____

5cm. _____

6in. _____


6)



6cm. _____

7in. _____

7)



7cm. _____

8in. _____

8)



8cm. _____

9in. _____

9)



9cm. _____

Answers

Exin. 2 1/2

Excm. 6 - 7

1in. _____

1cm. _____

2in. _____

2cm. _____

3in. _____

3cm. _____

4in. _____

4cm. _____

5in. _____

5cm. _____

6in. _____

6cm. _____

7in. _____

7cm. _____

8in. _____

8cm. _____

9in. _____

9cm. _____



Measure the width of each block in inches and in centimeters.



Exin. 2 1/2

Excm. 6 - 7



1in. 4 1/2

1cm. 11 - 12



2in. 3

2cm. 7 - 8



3in. 5

3cm. 12 - 13



4in. 2

4cm. 5 - 6



5in. 3 1/2

5cm. 8 - 9



6in. 5 1/2

6cm. 13 - 14



7in. 0 1/2

7cm. 1 - 2



8in. 1

8cm. 2 - 3



9in. 4

9cm. 10 - 11

Answers



Measure the width of each block in inches and in centimeters.

Ex)



Exin. 1

Excm. 2 - 3

1)



1in. _____

1cm. _____

2)



2in. _____

2cm. _____


3)



3in. _____

3cm. _____

4)



4in. _____

4cm. _____

5)



5in. _____

5cm. _____

6)



6in. _____

6cm. _____

7)



7in. _____

7cm. _____

8)



8in. _____

8cm. _____

9)




9in. _____

9cm. _____

Answers



Measure the width of each block in inches and in centimeters.



Answers

Exin. 1

Excm. 2 - 3

1in. 1 1/2

1cm. 3 - 4

2in. 5

2cm. 12 - 13

3in. 5 1/2

3cm. 13 - 14

4in. 0 1/2

4cm. 1 - 2

5in. 3

5cm. 7 - 8

6in. 2

6cm. 5 - 6

7in. 4

7cm. 10 - 11

8in. 4 1/2

8cm. 11 - 12

9in. 3 1/2

9cm. 8 - 9



Measure the width of each block in inches and in centimeters.

Ex)



Exin. 4 1/2

Excm. 11 - 12

1)



1in. _____

1cm. _____

2)



2in. _____

2cm. _____


3)



3in. _____

3cm. _____

4)



4in. _____

4cm. _____

5)



5in. _____

5cm. _____

6)



6in. _____

6cm. _____

7)



7in. _____

7cm. _____

8)



8in. _____

8cm. _____

9)



9in. _____

9cm. _____

Answers



Measure the width of each block in inches and in centimeters.



Answers

Exin. 4 1/2

Excm. 11 - 12

1in. 5 1/2

1cm. 13 - 14

2in. 1

2cm. 2 - 3

3in. 1 1/2

3cm. 3 - 4

4in. 4

4cm. 10 - 11

5in. 2

5cm. 5 - 6

6in. 2 1/2

6cm. 6 - 7

7in. 3

7cm. 7 - 8

8in. 0 1/2

8cm. 1 - 2

9in. 5

9cm. 12 - 13



Measure the width of each block in inches and in centimeters.

Ex)



Exin. 3

Excm. 7 - 8

1)



1in. _____

1cm. _____

2)



2in. _____

2cm. _____

3)



3in. _____

3cm. _____

4)



4cm. _____

5in. _____

5)



5cm. _____

6in. _____

6)



6cm. _____

7in. _____

7)



7cm. _____

8in. _____

8)



8cm. _____

9in. _____

9)



9cm. _____

Answers



Measure the width of each block in inches and in centimeters.



Exin. 3

Excm. 7 - 8



1in. 5

1cm. 12 - 13



2in. 1 1/2

2cm. 3 - 4



3in. 0 1/2

3cm. 1 - 2



4in. 4 1/2

4cm. 11 - 12



5in. 3 1/2

5cm. 8 - 9



6in. 2 1/2

6cm. 6 - 7



7in. 5 1/2

7cm. 13 - 14



8in. 2

8cm. 5 - 6



9in. 4

9cm. 10 - 11

Answers



Measure the width of each block in inches and in centimeters.

Ex)



Exin. 3

Excm. 7 - 8

1)



1in. _____

1cm. _____

2)



2in. _____

2cm. _____

3)



3in. _____

3cm. _____

4)



4in. _____

4cm. _____

5)



5in. _____

5cm. _____

6)



6in. _____

6cm. _____

7)



7in. _____

7cm. _____

8)



8in. _____

8cm. _____

9)



9in. _____

9cm. _____

Answers



Measure the width of each block in inches and in centimeters.



Answers

Exin. 3

Excm. 7 - 8

1in. 1 1/2

1cm. 3 - 4

2in. 0 1/2

2cm. 1 - 2

3in. 5 1/2

3cm. 13 - 14

4in. 1

4cm. 2 - 3

5in. 4 1/2

5cm. 11 - 12

6in. 4

6cm. 10 - 11

7in. 5

7cm. 12 - 13

8in. 2

8cm. 5 - 6

9in. 2 1/2

9cm. 6 - 7



Measure the width of each block in inches and in centimeters.



Exin. 5 1/2

Excm. 13 - 14



1in. _____

1cm. _____



2in. _____

2cm. _____



3in. _____

3cm. _____




4in. _____

4cm. _____



5in. _____

5cm. _____



6in. _____

6cm. _____



7in. _____

7cm. _____



8in. _____

8cm. _____



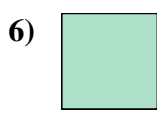
9in. _____

9cm. _____

Answers



Measure the width of each block in inches and in centimeters.



Answers

Exin. 5 1/2

Excm. 13 - 14

1in. 3 1/2

1cm. 8 - 9

2in. 4

2cm. 10 - 11

3in. 5

3cm. 12 - 13

4in. 1

4cm. 2 - 3

5in. 3

5cm. 7 - 8

6in. 0 1/2

6cm. 1 - 2

7in. 1 1/2

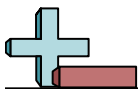
7cm. 3 - 4

8in. 2

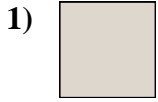
8cm. 5 - 6

9in. 4 1/2

9cm. 11 - 12



Measure the width of each block in inches and in centimeters.



Answers

Exin. 4

Excm. 10 - 11

1in. _____

1cm. _____

2in. _____

2cm. _____

3in. _____

3cm. _____

4in. _____

4cm. _____

5in. _____

5cm. _____

6in. _____

6cm. _____

7in. _____

7cm. _____

8in. _____

8cm. _____

9in. _____

9cm. _____



Measure the width of each block in inches and in centimeters.



Answers

Exin. 4

Excm. 10 - 11

1in. 0 1/2

1cm. 1 - 2

2in. 1 1/2

2cm. 3 - 4

3in. 5 1/2

3cm. 13 - 14

4in. 3

4cm. 7 - 8

5in. 2 1/2

5cm. 6 - 7

6in. 1

6cm. 2 - 3

7in. 2

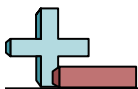
7cm. 5 - 6

8in. 4 1/2

8cm. 11 - 12

9in. 3 1/2

9cm. 8 - 9



Measure the width of each block in inches and in centimeters.



Exin. 3 1/2

Excm. 8 - 9



1in. _____

1cm. _____



2in. _____

2cm. _____



3in. _____

3cm. _____



4in. _____

4cm. _____



5in. _____

5cm. _____



6in. _____

6cm. _____



7in. _____

7cm. _____



8in. _____

8cm. _____



9in. _____

9cm. _____

Answers



Measure the width of each block in inches and in centimeters.



Answers

Exin. 3 1/2

Excm. 8 - 9

1in. 1

1cm. 2 - 3

2in. 1 1/2

2cm. 3 - 4

3in. 5 1/2

3cm. 13 - 14

4in. 5

4cm. 12 - 13

5in. 2

5cm. 5 - 6

6in. 3

6cm. 7 - 8

7in. 4 1/2

7cm. 11 - 12

8in. 2 1/2

8cm. 6 - 7

9in. 0 1/2

9cm. 1 - 2



Measure the width of each block in inches and in centimeters.

Ex)



Exin. 4

Excm. 10 - 11

1)



1in. _____

1cm. _____

2)



2in. _____

2cm. _____


3)



3in. _____

3cm. _____

4)



4in. _____

4cm. _____

5)



5in. _____

5cm. _____

6)



6in. _____

6cm. _____

7)



7in. _____

7cm. _____

8)



8in. _____

8cm. _____

9)





9in. _____

9cm. _____

Answers



Measure the width of each block in inches and in centimeters.



Answers

Exin. 4

Excm. 10 - 11

1in. 2

1cm. 5 - 6

2in. 3

2cm. 7 - 8

3in. 3 1/2

3cm. 8 - 9

4in. 0 1/2

4cm. 1 - 2

5in. 1 1/2

5cm. 3 - 4

6in. 2 1/2

6cm. 6 - 7

7in. 5

7cm. 12 - 13

8in. 4 1/2

8cm. 11 - 12

9in. 5 1/2

9cm. 13 - 14



Measure the width of each block in inches and in centimeters.



Exin. 1

Excm. 2 - 3



1in. _____

1cm. _____



2in. _____

2cm. _____



3in. _____

3cm. _____



4in. _____

4cm. _____



5in. _____

5cm. _____



6in. _____

6cm. _____




7in. _____

7cm. _____



8in. _____

8cm. _____




9in. _____

9cm. _____

Answers



Measure the width of each block in inches and in centimeters.



Answers

Exin. 1

Excm. 2 - 3

1in. 3 1/2

1cm. 8 - 9

2in. 5 1/2

2cm. 13 - 14

3in. 5

3cm. 12 - 13

4in. 4 1/2

4cm. 11 - 12

5in. 1 1/2

5cm. 3 - 4

6in. 4

6cm. 10 - 11

7in. 2

7cm. 5 - 6

8in. 3

8cm. 7 - 8

9in. 0 1/2

9cm. 1 - 2